

# Über den Zehner

17

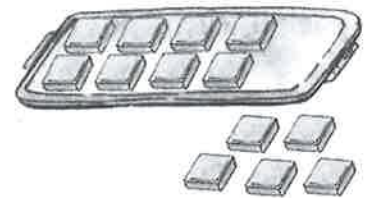
1



$$9 + 3 = \underline{\quad}$$




$$7 + 4 = \underline{\quad}$$



$$8 + 5 = \underline{\quad}$$

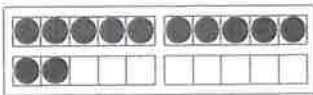
2 Verbinde und rechne.



$$7 + 5 = \underline{\quad}$$



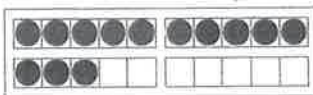
$$9 + 5 = \underline{\quad}$$




$$5 + 6 = \underline{\quad}$$



$$9 + 6 = \underline{\quad}$$



$$8 + 6 = \underline{\quad}$$



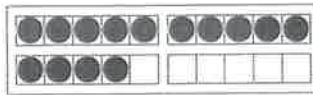
$$6 + 7 = \underline{\quad}$$



$$7 + 7 = \underline{\quad}$$



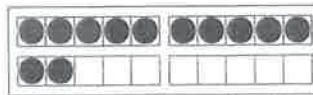
$$7 + 8 = \underline{\quad}$$



$$8 + 8 = \underline{\quad}$$



$$9 + 8 = \underline{\quad}$$



$$3 + 9 = \underline{\quad}$$



$$9 + 9 = \underline{\quad}$$

3

	+4	
5		
6		
7		
8		
9		

	+6	
9		
8		
7		
6		
5		

	+7	
4		
5		
8		
9		
11		

	+8	
6		
5		
4		
3		
2		

	+9	
4		
5		
6		
7		
8		