


Verdoppeln und Halbieren

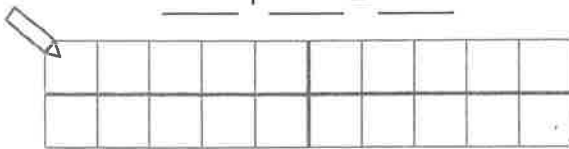
1 Verdopple.




$$\underline{6} + \underline{6} = \underline{12}$$




$$\underline{\quad} + \underline{\quad} = \underline{\quad}$$



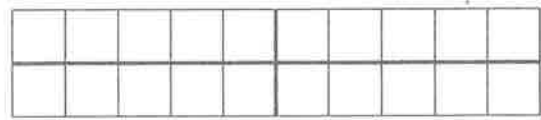
$$7 + 7 = \underline{\quad}$$



$$\underline{\quad} + \underline{\quad} = \underline{\quad}$$



$$\underline{\quad} + \underline{\quad} = \underline{\quad}$$

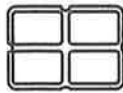


$$10 + 10 = \underline{\quad}$$

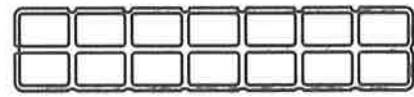
2 Halbiere.



$$10 = \underline{\quad} + \underline{\quad}$$



$$4 = \underline{\quad} + \underline{\quad}$$



$$14 = \underline{\quad} + \underline{\quad}$$

3

| | | | | | | | |
|--------------|---|---|---|---|----|---|----|
| Zahl | 4 | 5 | 6 | 7 | | 9 | |
| das Doppelte | 8 | | | | 16 | | 20 |

4

| | | | | | | | |
|------------|---|----|----|----|---|----|----|
| Zahl | 6 | 12 | 16 | 18 | | 10 | |
| die Hälfte | 3 | | | | 7 | | 10 |

Die Aufgaben waren für mich:



einfach mittel schwierig