
























1 Rechne.

 <u>3</u> + <u>1</u> = <u>4</u>	 ____ + ____ = ____	 ____ + ____ = ____
 ____ + ____ = ____	 ____ + ____ = ____	 ____ + ____ = ____
 ____ + ____ = ____	 ____ + ____ = ____	 ____ + ____ = ____

2 Rechne.

 1 + 2 = ____	 3 + 1 = ____	 2 + 3 = ____	 1 + 4 = ____
 2 + 2 = ____	 1 + 3 = ____	 4 + 1 = ____	 3 + 2 = ____

3 Finde Rechnungen.

 <u>1</u> + <u>3</u> = _____	 _____	 _____
 _____	 _____	 _____

→ Verschiedene Lösungen sind möglich.